





Joanna did a survey to see how many of her friends could swim and ride a bike. She showed her results in the Carroll diagram.

	Can ride a bike 	Cannot ride a bike 
Can swim 	Lily Olivia Jack Tom	Sarah Ruby Harry
Cannot swim 	James Alfie Emily	Will Chloe Grace

Use the diagram to answer the questions on the next page.





Use the chart to answer these questions about swimming and cycling.

1. Can Jack swim?

2. Can Grace ride a bike?

3. How many children can ride a bike but cannot swim?

4. Which children can do both?

5. How many children can swim?

6. How many children cannot ride a bike?

Make your own chart by asking your friends if they can swim and ride a bike.





Answers

Page 2

1. Yes.
2. No.
3. 3
4. Lily Olivia Jack Tom
5. 7
6. 6